

Table of Contents

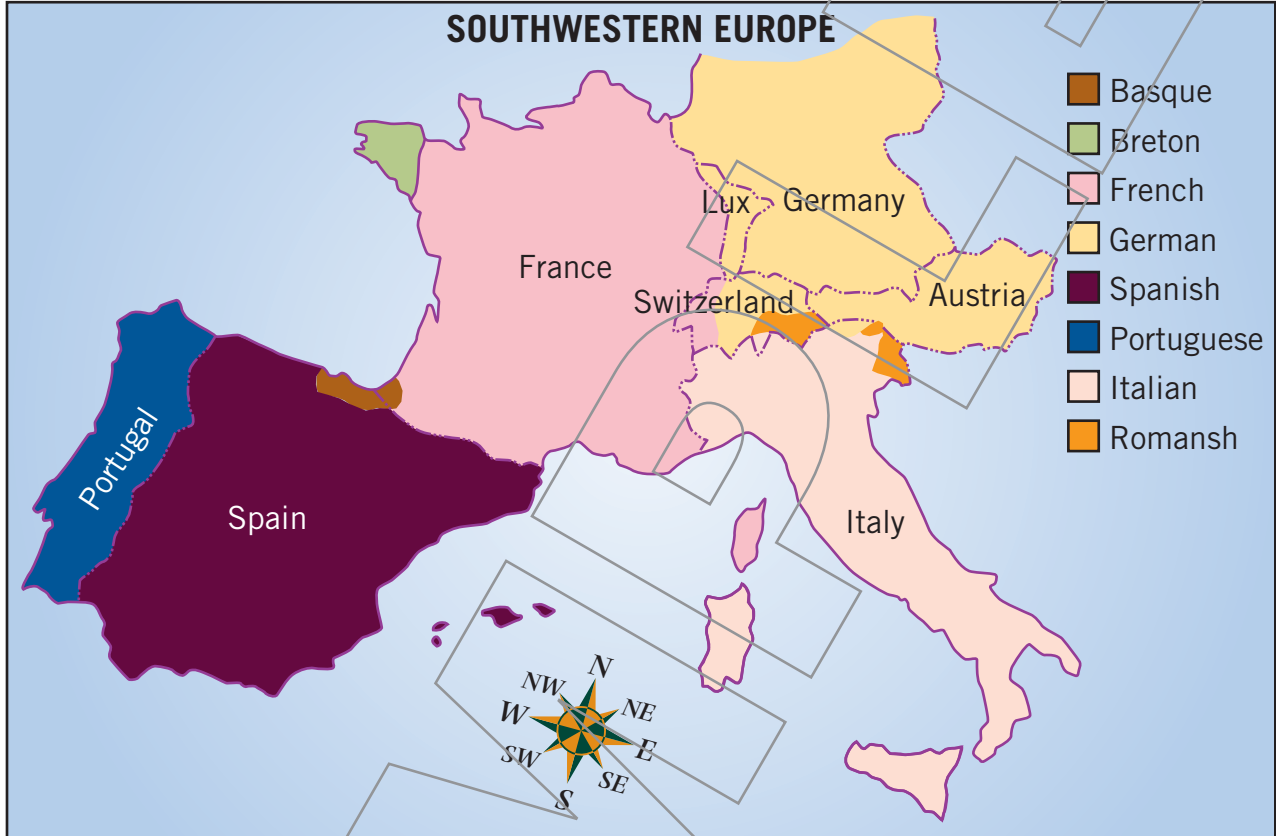
Using the Key, Direction Finder, and Scale	3	Map Review	27
Using a Grid on a Street Map	4	Recognizing Hemispheres on a Globe	28
Using a Grid on a Map	5	Understanding Latitude and Longitude	29
Using Mileage Markers and Mileage Tables	6	Using Latitude and Longitude	30
Using What You Have Learned	7	Understanding Time Zones	31
Understanding and Using Political Maps	8	Globe Review	32
Recognizing That Boundaries Change	9	Globe Review	33
Recognizing Bodies of Land and Water	10	Understanding Map Projections	34
Recognizing Bodies of Land and Water	11	Understanding the Robinson Map Projection	35
Using What You Have Learned	12	Understanding Polar Map Projections	36
Understanding Topographic Maps	13	Understanding Great Circle Routes	37
Understanding Climate Maps	14	Understanding Lambert's Map Projection	38
Understanding Rainfall Maps	15	Map Projection Review	39
Understanding Vegetation Maps	16	Understanding Different Types of Atlases	40
Understanding Land Use Maps	17	Understanding the Index in an Atlas	41
Using What You Have Learned	18	Understanding the Index in an Atlas	42
Understanding Population Maps	19	Finding Special Purpose Maps in an Atlas	43
Understanding Transportation Maps	20	Finding Special Purpose Maps in an Atlas	44
Understanding Weather and Transit Maps	21	Finding Special Purpose Maps in an Atlas	45
Using What You Have Learned	22	Atlas Review	46
Understanding Historical Maps	23	Glossary	47
Understanding Language Maps	24	Glossary	48
Understanding a Map of a Recreation Area	25		
Using What You Have Learned	26		



Understanding Language Maps

Almost anything that involves location can be mapped. The map below is a **language map**. It shows the main languages spoken in southwestern Europe.


Study the map. Then circle T (true) or F (false) for each statement below.



- T F **1.** French is spoken in France and in part of Switzerland.
- T F **2.** German is spoken only in Germany.
- T F **3.** Portuguese is the main language of Spain.
- T F **4.** Basque is spoken in parts of France and Spain.
- T F **5.** French is the only language spoken in France.

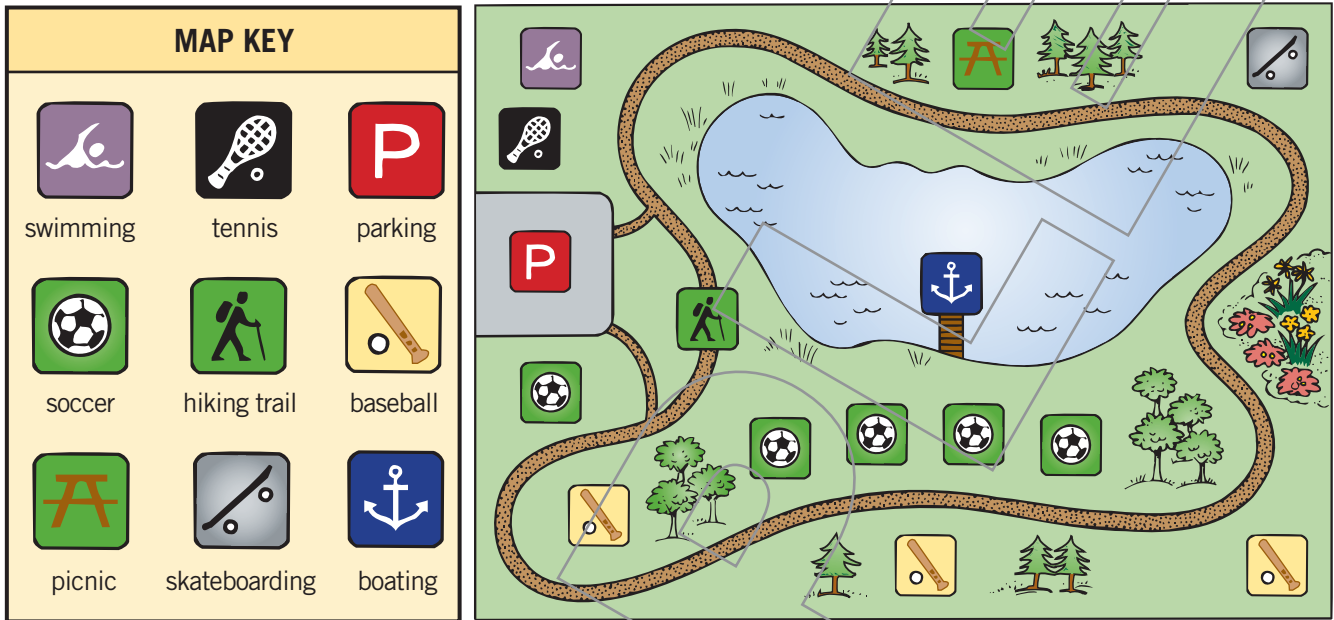
Use the map to answer the questions below.

- 6.** What is the main language of Italy? _____
- 7.** What language is spoken in Austria? _____
- 8.** What is the main language of Portugal? _____
- 9.** What two languages are spoken in Spain? _____
- 10.** What are the four main languages of Switzerland? _____



Understanding a Map of a Recreation Area

Just about anything that shows the placement of things can be mapped. This map shows a recreation area. The recreation area has many different places where people can play different sports or do different activities.



Study the map and its key. Then answer the questions below.

- How many different activities are shown on the map? _____
- How many places are there for water activities? _____
- How many baseball fields are there? _____
- What two facilities are closest to the parking lot? _____
- Which facilities are closer to each other, baseball and boating or swimming and tennis?

- Sixteen soccer teams arrive to play in a tournament. Two teams play in each game. How many teams can play soccer at the same time? _____
- What facilities are inside the hiking trail? _____
- What two facilities are the farthest away from the parking lot? _____
- If a tennis player hits a shot wildly, would the ball be more likely to end up on the hiking trail or in the picnic area? _____
- If a baseball player hits a home run, would it be more likely to end up on a soccer field or a tennis court? _____