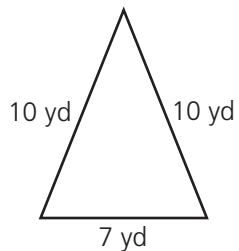


Contents

Lesson 1	Customary Units of Length	4
Lesson 2	Using a Ruler: Inches	6
Lesson 3	Equivalent Units of Customary Length	8
Lesson 4	Metric Units of Length.	10
Lesson 5	Using a Ruler: Centimeters	12
Lesson 6	Equivalent Units of Metric Length	14
Lesson 7	Customary Units of Weight	16
Lesson 8	Customary Units of Capacity	18
Lesson 9	Equivalent Units of Customary Weight and Capacity	20
Lesson 10	Metric Units of Weight.	22
Lesson 11	Metric Units of Capacity	24
Lesson 12	Equivalent Units of Metric Weight and Capacity	26
Lesson 13	Estimating Customary Measurements.	28
Lesson 14	Estimating Metric Measurements.	30
Lesson 15	Elapsed Time	32
Lesson 16	More Elapsed Time	34
Lesson 17	Perimeter	36
Lesson 18	More Perimeter	38
Lesson 19	Area.	40
Lesson 20	More Area.	42
Lesson 21	Using a Protractor	44
Lesson 22	Measuring Angles	46
	How to Answer Constructed Response Questions.	48

LESSON 17 Perimeter

The **perimeter** of a plane figure is the distance around it. To find the perimeter, add the lengths of all the sides.



$$10 + 10 + 7 = 27$$

The perimeter of this triangle is 27 yards.

Perimeter of a **square**:


$$P = 4 \times s$$

Perimeter of a **rectangle**:


$$P = 2 \times l + 2 \times w$$

If a geometric figure is **regular**, all its sides are the same length.

Read each problem. Circle the letter of the best answer.

- 1  Use your centimeter ruler to help you solve this problem.

What is the perimeter of this rectangle?



- A 5 cm C 10 cm
B 7 cm D 14 cm

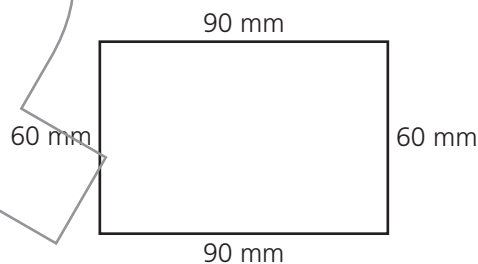
Measure each side of the rectangle. The length is 5 cm and the width is 2 cm. Multiply the length by 2 and the width by 2: $5 \times 2 = 10$ and $2 \times 2 = 4$. Then add the results to find the perimeter: $10 + 4 = 14$. The correct answer is D.

- 2 What is the perimeter of this regular pentagon?



- A 12 feet C 49 feet
B 35 feet D 70 feet

- 3 Which expression can be used to find the perimeter of this rectangle?



- A 60×90
B $(2 + 60) \times (2 + 90)$
C $(2 \times 60) + (2 \times 90)$
D $(2 + 60) + (2 + 90)$

- 4 The perimeter of this square is 56 inches.



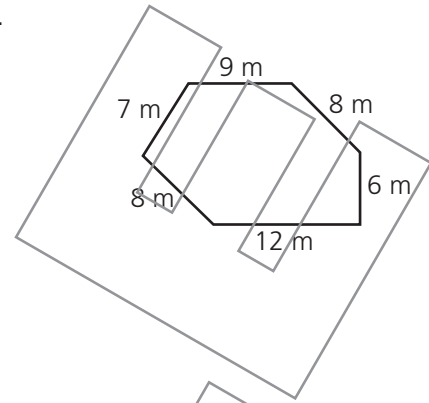
What is the length of a side of this square?

- A 7 inches C 14 inches
B 9 inches D 17 inches

Read each problem. Write your answers.


5 Jaleel measured the side lengths on the shape at the right.

A What is the perimeter of this shape?




Answer: _____

B Explain how you found your answer.

6  Use your inch ruler to help you solve this problem.

A What is the perimeter of the whole figure?



Answer: _____

B Is this figure divided into two squares?

Answer: _____

C Explain how you know your answer to part B is correct.
