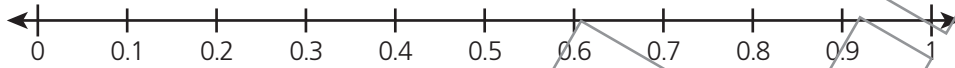


Independent Practice

3 _____

4 (A) (B) (C) (D)

5 Part A



Part B _____ mile

6 True False

- | | |
|--------------------------|--------------------------|
| <input type="checkbox"/> | <input type="checkbox"/> |
| <input type="checkbox"/> | <input type="checkbox"/> |
| <input type="checkbox"/> | <input type="checkbox"/> |
| <input type="checkbox"/> | <input type="checkbox"/> |
| <input type="checkbox"/> | <input type="checkbox"/> |

PAGES 206–212 Lesson 29: Comparing Decimals


Introduction, Think About It

Focused Instruction

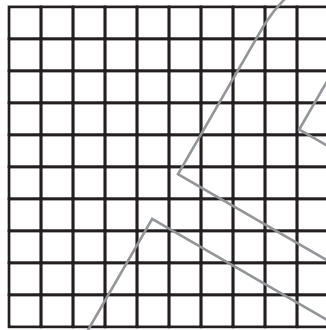
► Compare 0.41 and 0.38.

Focused Instruction

- _____
- _____
- Fred buys a bag of nuts that weighs 0.18 pound. Franny buys a bag of nuts that weighs 0.2 pound. Did Fred buy a greater or a lesser amount than Franny?

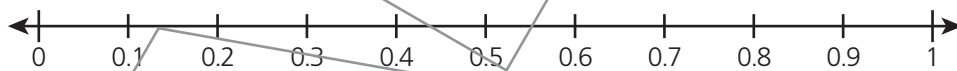


0.18



0.2

- List the decimals 0.82, 0.53, and 0.69 in order from least to greatest.



1 0.37 0.29 0.48 0.5 0.6 0.60

2 _____