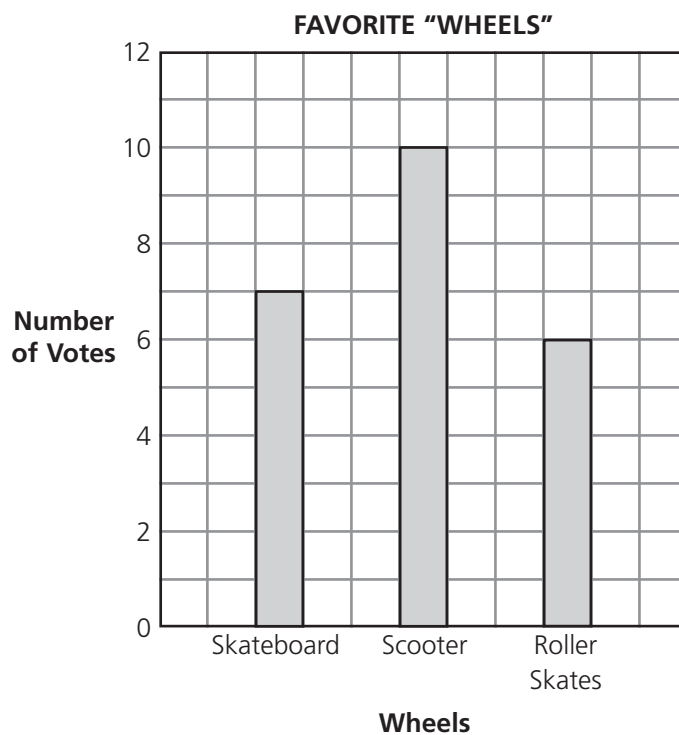


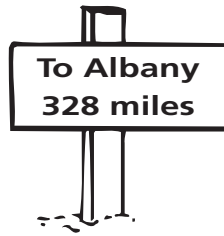
- 8 The student's in Olivia's class voted for their favorite toys with wheels. The bar graph shows the results.



What was the **total** number of votes?

- A** 10
- B** 17
- C** 23
- D** 24


- 9 Mrs. Jenkins saw this sign along the road.



Which is another way to write 328?


- A $3 + 2 + 8$
- B $3 + 20 + 800$
- C $300 + 20 + 8$
- D $300 + 200 + 800$

- 10 What fraction of this group of kittens is gray?



- A $\frac{1}{6}$
- B $\frac{1}{5}$
- C $\frac{1}{4}$
- D $\frac{1}{3}$


- 11** Antonio poured 32 fluid ounces of milk into these 4 glasses.



How much milk is in each glass?

- A** 4 fluid ounces
- B** 6 fluid ounces
- C** 8 fluid ounces
- D** 10 fluid ounces

- 12** Which is the **best** estimate of the number of stars the girl can see?



- A** 25
- B** 50
- C** 100
- D** 200