

Do These Sentences Make Sense?

Look at each picture. Read the number sentence.
Decide if it makes sense. Circle **yes** or **no**.


1.



$$7 + 5 = 12$$

yes no


2.



$$8 + 4 = 12$$

yes no


3.



$$5 + 3 = 8$$

yes no


4.



$$3 + 6 = 9$$

yes no


5.



$$7 - 3 = 4$$

yes no

6.



$$5 - 5 = 0$$


yes no

On Your Own

Draw a picture to show $5 + 5 = 10$. Then draw a picture to show $10 - 5 = 5$. Work on another piece of paper.

Using a Picture

Look at this picture. Use it to solve each problem.



- | | |
|--|---|
| 1. How many lions and tigers are there? | 2. How many more tigers than lions are there? |
| 3. How many more bears than monkeys are there? | 4. How many animals are there in all? |

On Your Own

Make your own zoo. Give it 15 animals. Make them 4 different kinds. Work on another piece of paper.