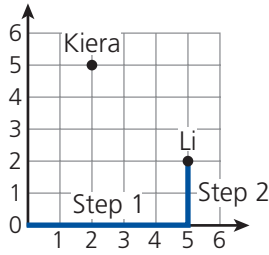


Contents

Lesson 1	Points and Lines	4
Lesson 2	Rays and Angles	6
Lesson 3	Parallel and Perpendicular Lines	8
Lesson 4	Plane Figures	10
Lesson 5	More Plane Figures	12
Lesson 6	Quadrilaterals.	14
Lesson 7	More Quadrilaterals.	16
Lesson 8	Composing Figures	18
Lesson 9	Decomposing Figures	20
Lesson 10	Perimeter of Plane Figures	22
Lesson 11	Solid Figures.	24
Lesson 12	More Solid Figures.	26
Lesson 13	Relationship of Plane Figures to Solids	28
Lesson 14	Solids and Nets	30
Lesson 15	Symmetry	32
Lesson 16	Slides and Turns.	34
Lesson 17	Flips	36
Lesson 18	Congruent Figures.	38
Lesson 19	Similar Figures	40
Lesson 20	Coordinate Planes: Ordered Pairs	42
Lesson 21	Coordinate Planes: Locating Points	44
Lesson 22	Coordinate Planes and Geometric Shapes.	46
	How to Answer Constructed Response Questions.	48

A **coordinate plane** is a kind of graph. An **ordered pair** of numbers names the location of a point on the plane.



The **first** number names the distance **over** to the right from 0.

The **second** number names the distance **up** from 0.

Li is located at (5, 2).

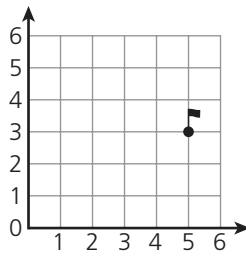
Ordered pairs are also called **coordinates**.

Location means “position” or “place.” Locations can be up, down, left, or right.

Keira is located 2 units to the right of 0 and 5 units up from 0. Keira’s location is (2, 5).

Read each problem. Circle the letter of the best answer.

- 1 Which ordered pair names the location of the flag?



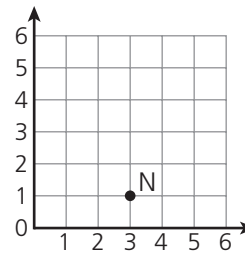
- A (3, 5) C (5, 3)
 B (4, 5) D (5, 4)

First read **over** to the right 5 units from 0. Then read **up** 3 units. The flag is at (5, 3). The correct answer is C.

- 2 Smithtown is located 6 units to the right of 0 and 1 unit up on a plane. What are the coordinates where Smithtown is located?

- A (0, 1)
 B (1, 6)
 C (6, 1)
 D (6, 6)

- Use this coordinate plane to answer questions 3 and 4.



- 3 Which ordered pair names the location of the letter N?

- A (0, 3) C (3, 0)
 B (1, 3) D (3, 1)

- 4 Kasey puts the letter X 1 unit to the right of N and 3 units up. What is the location of the letter X?

- A (4, 3)
 B (4, 4)
 C (6, 2)
 D (6, 4)

Read each problem. Write your answers.

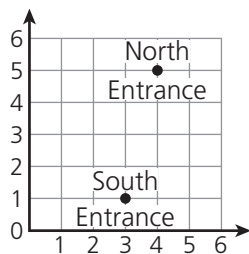
5 Malik located a point on a coordinate plane. He moved 5 units to the right of 0. Then he moved 7 units up.

A What are the coordinates of the point Malik located?

Answer: _____

B Explain why your answer is correct.

6 The coordinate plane shows the two entrances for a hiking trail.



A What ordered pair names the location of the North Entrance?

Answer: _____

B Meg starts at (0, 0). She walks to the South Entrance. She continues walking right another 2 units and stops. What ordered pair names the location where Meg stopped?

Answer: _____

C Explain how you found your answer to part B.
