



Silly Animals

Fanny cut out 10 \triangle . Omar cut out 10 \circ . Malik cut out 10 \square . Then they used some of the shapes to make these animals.


SILLY ANIMALS



Cat



Dog



Duck

1. How many \circ were used in the silly animals in all?


2. How many \circ were not used?

3. Kivi made two new kinds of shapes. He made 3 of each shape. How many shapes did he make?

4. How many \triangle , \square , and \circ were used in all in the silly animals?

Pies

Mr. Cox baked 3 pies. Here are the apple and peach pies. He cut the cherry pie into fourths.



1. How many pieces of cherry pie did Mr. Cox make?

2. How much of the apple pie is left?

3. Mr. Cox also baked a cake. He cut it into thirds. How many pieces did he make?

4. Draw a picture of the cherry pie. Show how it was cut. Someone ate $\frac{1}{4}$ of it. Color the rest of the pie red.